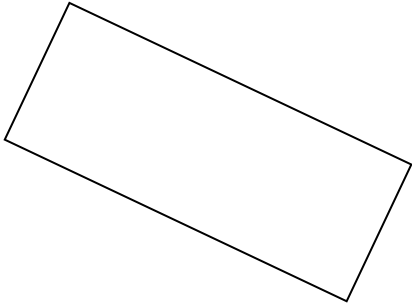
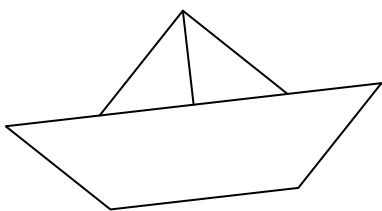
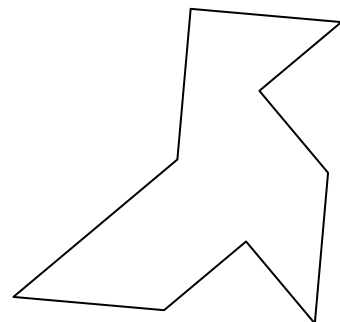
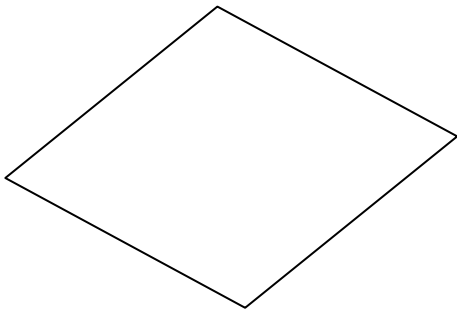



Construire les symétriques des figures suivantes par rapport à l'axe  $(\Delta)$  :



$(\Delta)$



**CORRIGE – M. QUET**

Construire les symétriques des figures suivantes par rapport à l'axe  $(\Delta)$  :

